

1 واحد



أنتزب على الجمار

1 1 1 1 1 1 1 1 1 1 1

1 1 1 1 1

1



.....

وَاحِد

وَاحِد

وَاحِد

وَاحِد

$$1 + 0 = 1$$

$$0 + 1 = 1$$

• ألون البطاقات التي تمثل العدة "واحد/1":



$$1 + 0 = .$$

$$0 + 1 = .$$

• أكتب:

0

1

2

3

4

5

6

7

8

9





AWA2EL

Inclusão – Autismo e Educação

Simone Helen Drummond Ischkanian

NOME: _____

	$+$		$=$	
2	$+$	2	$=$	





AWA2EL

Inclusão – Autismo e Educação

Simone Helen Drummond Ischkanian

NOME: _____

	$+$		$=$	
3	$+$	3	$=$	





AWA2EL

Inclusão – Autismo e Educação

Simone Helen Drummond Ischkanian

NOME: _____

	$+$		$=$	
8	$+$	1	$=$	





AWA2EL

Inclusão – Autismo e Educação

Simone Helen Drummond Ischkanian

NOME: _____

	$+$		$=$	
5	$+$	1	$=$	





AWA2EL

Inclusão – Autismo e Educação

Simone Helen Drummond Ischkanian

NOME: _____

	$+$		$=$	
5	$+$	5	$=$	





AWA2EL

Inclusão – Autismo e Educação

Simone Helen Drummond Ischkanian

NOME: _____

	$+$		$=$	
4	$+$	1	$=$	





AWA2EL

Inclusão – Autismo e Educação

Simone Helen Drummond Ischkanian

NOME: _____

	$+$		$=$	
6	$+$	6	$=$	





AWA2EL

Inclusão – Autismo e Educação

Simone Helen Drummond Ischkanian

NOME: _____


	$+$		$=$	
9	$+$	9	$=$	



8 8 8 8 8 8 8 8 8 8 8 8 8 8 8 8

8 8 8 8 8 8

8



..... ثمانية ثمانية ثمانية ثمانية



$7 + 1 = 8$

$6 + 2 = 8$

$5 + 3 = 8$

$4 + 4 = 8$

• ألون البطاقات التي تمثل العدد "ثمانية/8":



$3 + 5 = .$

$2 + 6 = .$

$4 + 4 = .$

• أخصب:

0	1	2	3	4	5	6	7	8	9
---	---	---	---	---	---	---	---	---	---



9 9 9 9 9 9 9 9 9 9 9 9 9 9 9 9
 9 9 9 9 9 9
 9



تِسْعَةٌ تِسْعَةٌ تِسْعَةٌ تِسْعَةٌ تِسْعَةٌ

تِسْعَةٌ

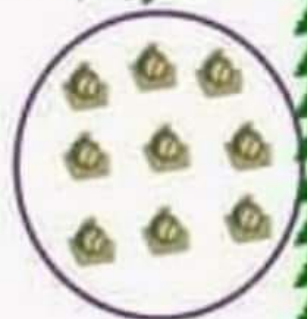


$8 + 1 = 9$

$7 + 2 = 9$

$6 + 3 = 9$

$5 + 4 = 9$

• أَلَوْنِ الْبَطَائِقِ الَّتِي تُشْتَلُ الْعِدَّةُ "تِسْعَةٌ/9":



$4 + 5 = .$

$3 + 6 = .$

$7 + 2 = .$

• أَحْضِبْ:

0	1	2	3	4	5	6	7	8	9
---	---	---	---	---	---	---	---	---	---





AWA2EL

Inclusão – Autismo e Educação

Simone Helen Drummond Ischkanian

NOME: _____

	$+$		$=$	
7	$+$	1	$=$	



أنتزب على الجمل

3 3 3 3 3 3 3 3 3 3 3

3 3 3 3 3 3

3





.....	ثَلَاثَةٌ	ثَلَاثَةٌ	ثَلَاثَةٌ
-------	-----------	-----------	-----------

ثَلَاثَةٌ

$$3 + 0 = 3$$

$$2 + 1 = 3$$

• ألون البطاقات التي تمثل العدد "ثلاثة/3":



0 + 3 = .

1 + 2 = .

2 + 1 = .

• اُخْبِد:

0	1	2	3	4	5	6	7	8	9
---	---	---	---	---	---	---	---	---	---





AWA2EL

Inclusão – Autismo e Educação

Simone Helen Drummond Ischkanian

NOME: _____

	$+$		$=$	
8	$+$	8	$=$	



2 2 2 2 2 2 2 2 2 2 .
 2 2 2 2 2 2
 2






..... اِثْنَانِ اِثْنَانِ اِثْنَانِ

اِثْنَانِ

$$2 + 0 = 2$$

$$1 + 1 = 2$$

• أَلَوْنُ الْبَطَائِقِ الَّتِي تُمَثِّلُ الْعَدَدَ "اثنان/2":



$$0 + 2 = .$$

$$2 + 0 = .$$

$$1 + 1 = .$$

• اُخْبِرْ:



0 1 2 3 4 5 6 7 8 9



Inclusão – Autismo e Educação

Simone Helen Drummond Ischkanian

NOME: _____

	$+$		$=$	
1	$+$	1	$=$	





AWA2EL

Inclusão – Autismo e Educação

Simone Helen Drummond Ischkanian

NOME: _____

	$+$		$=$	
2	$+$	1	$=$	





AWA2EL

Inclusão – Autismo e Educação

Simone Helen Drummond Ischkanian

NOME: _____

	$+$		$=$	
7	$+$	7	$=$	





AWA2EL

Inclusão – Autismo e Educação

Simone Helen Drummond Ischkanian

NOME: _____

	$+$		$=$	
0	$+$	0	$=$	



7 7 7 7 7 7 7 7 7 7 7 7 7 7 7 7

7 7 7 7 7 7

7



سَبْعَةٌ

.....


سَبْعَةٌ

سَبْعَةٌ

$$7 + 0 = 7$$



$$6 + 1 = 7$$





$$2 + 5 = 7$$



$$3 + 4 = 7$$



• أَلَوْنِ الْبَطَاقَاتِ الَّتِي تُشَبِّهُ الْعَدَدَ "سَبْعَةَ/7":



$$4 + 3 = .$$

$$2 + 5 = .$$

$$1 + 6 = .$$

• اُخْتِمْ:

0

1

2

3

4

5

6

7

8

9





AWA2EL

Inclusão – Autismo e Educação

Simone Helen Drummond Ischkanian

NOME: _____

	$+$		$=$	
3	$+$	1	$=$	



6 6 6 6 6 6 6 6 6 6 6 6 6 6 6 6

6 6 6 6 6 6

6



.....

6

6

6

سِتَّة



$6 + 0 = 6$

$5 + 1 = 6$

$2 + 4 = 6$

$3 + 3 = 6$

• أَلَوْنُ الْبَطَاقَاتِ الَّتِي تُمَثِّلُ الْعَدَدَ "سِتَّة/6":



$3 + 3 = .$

$1 + 5 = .$

$4 + 2 = .$

• اُخْتِمْ:

0	1	2	3	4	5	6	7	8	9
---	---	---	---	---	---	---	---	---	---





AWA2EL

Inclusão – Autismo e Educação

Simone Helen Drummond Ischkanian

NOME: _____

	$+$		$=$	
9	$+$	1	$=$	





AWA2EL

Inclusão – Autismo e Educação

Simone Helen Drummond Ischkanian

NOME: _____

	+		=	
1	+	5	=	



4 4

4 4 4 4 4 4

4



.....	أربعة	أربعة	أربعة
-------	-------	-------	-------

أربعة


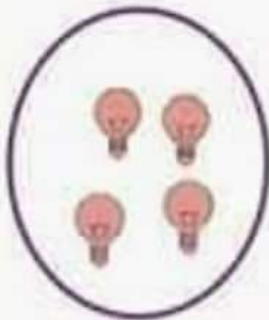
$$\begin{array}{c} \text{|||} \\ 4 \end{array} + \begin{array}{c} \text{|||} \\ 0 \end{array} = \begin{array}{c} \text{|||} \\ 4 \end{array}$$

$$\begin{array}{c} \text{|||} \\ 3 \end{array} + \begin{array}{c} \text{|} \\ 1 \end{array} = \begin{array}{c} \text{|||} \\ 4 \end{array}$$

$$\begin{array}{c} \text{||} \\ 2 \end{array} + \begin{array}{c} \text{||} \\ 2 \end{array} = \begin{array}{c} \text{|||} \\ 4 \end{array}$$

$$\begin{array}{c} \text{|} \\ 1 \end{array} + \begin{array}{c} \text{|||} \\ 3 \end{array} = \begin{array}{c} \text{|||} \\ 4 \end{array}$$

• ألون البطاقات التي تمثل العدد "أربعة/4":



$$1 + 3 = .$$

$$0 + 4 = .$$

$$2 + 2 = .$$

• أكتب:

0	1	2	3	4	5	6	7	8	9
---	---	---	---	---	---	---	---	---	---



5 5 5 5 5 5 5 5 5 5 5 5 5 5 5 5

5 5 5 5 5 5

5



.....	خَمْسَةٌ	خَمْسَةٌ	خَمْسَةٌ
-------	----------	----------	----------

خَمْسَةٌ



$$\begin{array}{c} 5 \\ |||| \\ + 0 \\ \hline = 5 \\ |||| \end{array}$$

$$\begin{array}{c} 4 \\ |||| \\ + 1 \\ | \\ \hline = 5 \\ |||| \end{array}$$

$$\begin{array}{c} 2 \\ || \\ + 3 \\ ||| \\ \hline = 5 \\ |||| \end{array}$$

$$\begin{array}{c} 1 \\ | \\ + 4 \\ |||| \\ \hline = 5 \\ |||| \end{array}$$

• ألون البطاقات التي تمثل العدد "خمسة/5":



$$2 + 3 = .$$

$$1 + 4 = .$$

$$0 + 5 = .$$

• اُخْبِ:





AWA2EL

Inclusão – Autismo e Educação

Simone Helen Drummond Ischkanian

NOME: _____

	+		=	
0	+	5	=	